







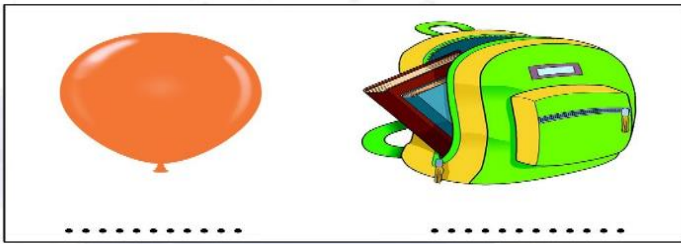
Indian School Nizwa

Subject : Mathematics

Worksheet – Ch:7 Measurement

Name: _____ Date: _____ Class: I Sec: __

I. Identify and Write (H) for heavy and (L) for light objects :



II. Write Whether we use handspan or footspan

- a) The length of a cot = _____
- b) Distance travelled from town to home _____
- c) Length of a soft board = _____
- d) Walking from ground to the classroom = _____

III. Colour the Tallest animal




IV. Measure the length and answer the following :



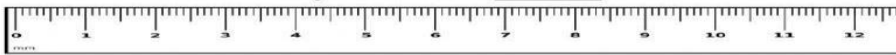
Caterpillar

_____ cm




Toy car

_____ cm



Water Bottle

_____ cm



Soda

_____ cm



1. Which is the longest ? _____

2. The _____ is 4 cm long .

3. The caterpillar is _____ cm long .

V. Tick \checkmark the objects with the greater capacity and .Cross X the object with lesser capacity .

a)

